

MyPlate Math


Name: _____

Red=Fruit

Green= Vegetable

Orange= Grain


Purple= Protein



Matt fills his plate with:

- $\frac{1}{4}$ fruit
- $\frac{1}{4}$ grain
- $\frac{1}{4}$ protein
- $\frac{1}{4}$ vegetable


What does Matt's plate look like?



Kate fills her plate with:

- $\frac{1}{2}$ vegetables
- $\frac{1}{4}$ protein
- $\frac{1}{4}$ grain

What does Kate's plate look like?



Dan fills his plate with:

- $\frac{3}{4}$ grain
- $\frac{1}{4}$ protein

What does Dan's plate look like?

1. Which student ate the most vegetables? _____

2. Which student ate the most fruit? _____